

Unit 2, Station 3, Round 2, Task 2




Fraction, Decimal

Name: _____


Determine the value written as a fraction , decimal

Ex)




Fraction $\frac{61}{100}$
Decimal 0.61

1)




Fraction _____
Decimal _____

2)



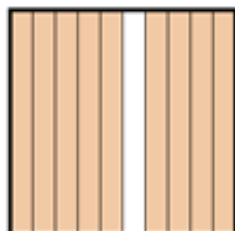
Fraction _____
Decimal _____

3)




Fraction _____
Decimal _____

4)




Fraction _____
Decimal _____

5)



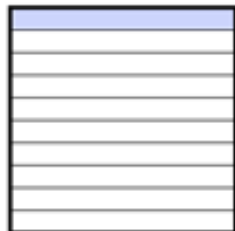
Fraction _____
Decimal _____

6)




Fraction _____
Decimal _____

7)




Fraction _____
Decimal _____

8)




Fraction _____
Decimal _____

9)




Fraction _____
Decimal _____

10)



Fraction _____
Decimal _____

11)



Fraction _____
Decimal _____